

Record the answers in your book. You can write on the sheet and use the fraction bars to help you work out the answer.


1. $\frac{9}{10} - \frac{5}{10} = \frac{4}{10}$




2. $\frac{3}{4} - \frac{1}{4} = \frac{2}{4}$



3. $\frac{3}{8} - \frac{3}{8} = \frac{0}{8}$




4. $\frac{6}{7} - \frac{6}{7} = \frac{0}{7}$



5. $\frac{1}{5} - \frac{1}{5} = \frac{0}{5}$



6. What is the difference between $\frac{1}{3}$ and $\frac{2}{3}$?



7. What is the difference between $\frac{11}{12}$ and $\frac{4}{12}$?

