

## Telling the Time to 5 Minutes


4. Draw a line to match the times to the number on the clock that the minute hand would be pointing at.

10 past

5 to

20 past

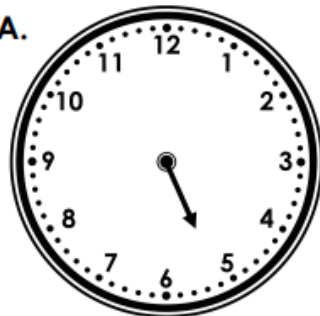
quarter to



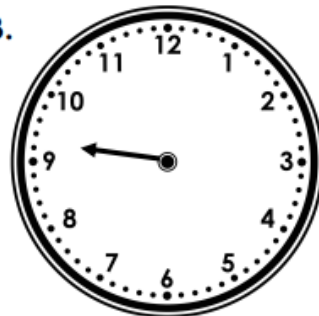
VF  
HW/Ext

5. Draw the minute hand on the clocks to tell the correct time.

A.



B.



20 past 5

10 past 9



VF  
HW/Ext

6. Bill's oven has broken and he can only cook one bun at a time. He has 5 buns and each bun will take 5 minutes to cook.



If I start cooking at  
10 past 12, I will be  
finished at half past  
12.

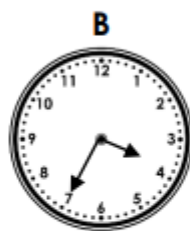
Is Bill correct?  
Explain how you know.



RPS  
HW/Ext

## Telling Time to 5 Minutes

4a. Draw lines to match the correct times.



25 to 4

20 past 9

10 past 10



PS

5a. Meadow says,



I left home at 10 past 8  
and arrived at school at  
20 to 9, so the minute  
hand was on the 4.

Is she correct?

Explain why.

6a. Pete starts his run at 20 past 4.

He runs for 5 minutes in one direction and  
then runs 5 minutes back.

What time does he finish his run?



PS