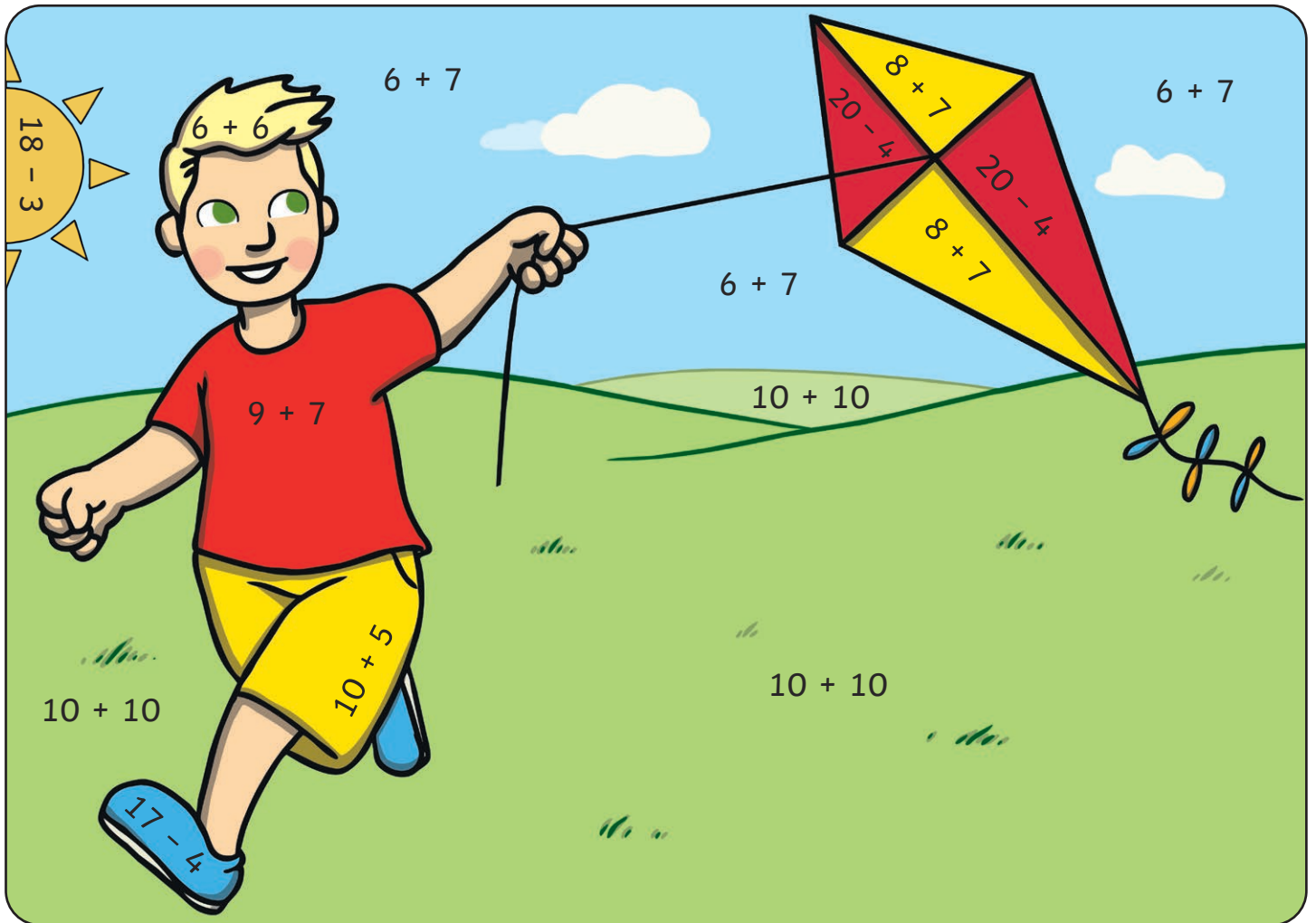


Summer Themed Maths Activity Booklet Answers



Addition and Subtraction to 20

Colour by Number **Answers**



| | | | | | |
|----------------|-----------|-----------|-----------|-----------|-----------|
| Answer: | 16 | 15 | 20 | 12 | 13 |
| Colour: | red | yellow | green | brown | blue |

Addition and Subtraction to 20

Summer Mosaic **Answers**

yellow = 0-8

pink = 9-15









brown = 16-20

| | | | | | | | |
|--|-----------|----------|----------|-----------|-----------|----------|--|
| | | | | | | $17 - 1$ | |
| | | | $19 - 4$ | $9 + 6$ | | $17 + 2$ | |
| | | $10 - 1$ | $6 + 5$ | $19 - 10$ | $12 + 2$ | $18 - 2$ | |
| | $15 - 4$ | $12 + 3$ | $18 - 9$ | $11 + 2$ | $17 - 2$ | $5 + 8$ | |
| | $20 - 20$ | $5 + 2$ | $17 - 9$ | $2 + 6$ | $2 - 1$ | $2 + 2$ | |
| | $9 - 1$ | $8 + 0$ | $10 - 2$ | $1 + 6$ | $18 - 10$ | $4 + 3$ | |
| | | $14 - 7$ | $6 - 3$ | $3 + 2$ | $5 + 2$ | | |
| | | | $7 - 4$ | $20 - 12$ | | | |
| | | | $5 + 1$ | $2 + 6$ | | | |


Challenge: You have 5 ice creams. You eat 2. How many do you have left?
Write this problem as a calculation.





$$5 - 2 = 3$$

I Spy and Count to 20 **Answers**

| Object | Numeral | Number Word | Object | Numeral | Number Word |
|---|-----------|--------------|---|-----------|----------------|
|  | 10 | ten |  | 1 | one |
|  | 2 | two |  | 9 | nine |
|  | 3 | three |  | 11 | eleven |
|  | 10 | ten |  | 15 | fifteen |

2D Shape Hunt **Answers**



| | | | |
|--|----------|---|----------|
|  | 6 |  | 4 |
|  | 9 |  | 2 |

Number Representations to 20



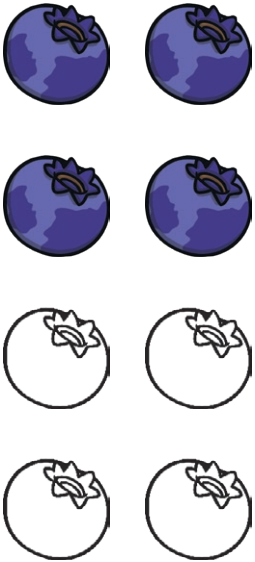
Match Up **Answers**

The image shows a matching exercise with five number representations on the left and five sailboats with numbers and words on the right. Lines connect each representation to its corresponding sailboat.

| Number Representation | Sailboat Number | Sailboat Word |
|---------------------------------------|-----------------|---------------|
| 15 (one ten rod and five unit cubes) | 15 | fifteen |
| 12 (one ten rod and two unit cubes) | 12 | twelve |
| 3 (three unit cubes) | 3 | three |
| 13 (one ten rod and three unit cubes) | 13 | thirteen |
| 8 (eight unit cubes) | 8 | eight |



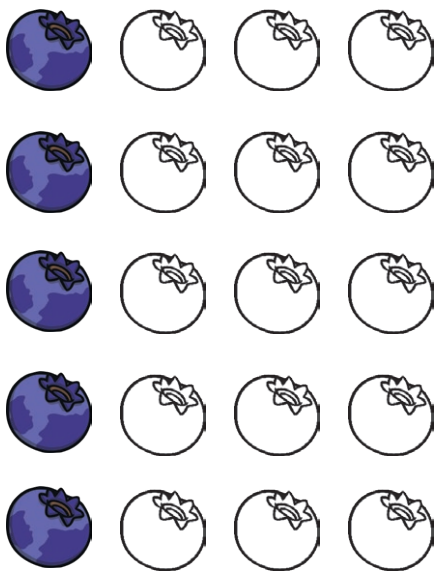
Summer Fruits Fractions **Answers**

For each group of summer fruits, colour in $\frac{1}{2}$.

| | | |
|---|---|---|
|  |  |  |
|---|---|---|


Other combinations may be coloured, provided it is the correct amount of fruit.

For each group of summer fruits, colour in $\frac{1}{4}$.

| | | |
|---|--|---|
|  |  |  |
|---|--|---|


Other combinations may be coloured, provided it is the correct amount of fruit.

Telling the Time **Answers**




What time do you get up to go on holiday?

7 o'clock




What time do you set off on holiday?

half past 8




What time do you play on the beach?

11 o'clock




What time do you eat an ice cream?

half past 1



At 4 o'clock, you go swimming.
Draw the hands on the clock.



At half past 6, you go to a disco.
Draw the hands on the clock.


If you go on holiday the day after Sunday, what day will you go on holiday?


















Monday

If you go to the beach on the second day of your holiday, what day will you go to the beach?

Tuesday


Counting in 2s Maze **Answers**



| | | | | | | | |
|----|---|----|---|--|--|---|---|
| | 0 | 2 | 4 | 6 | 8 | 2 | 8 |
| 10 |  | | 8 |  | 10 |  | 12 |
| 2 | 14 | 16 | 14 | 12 | 46 | 4 | |
| 12 |  | 18 |  | 16 |  | 34 | |
| 10 | 8 | 4 | 44 | 20 | 22 | 24 | 32 |
| 2 |  | 22 |  | 30 |  | 26 |  |
| 6 | 4 | 36 | 34 | 32 | 30 | 28 | 14 |
| 20 |  | 38 |  | 28 |  | 8 |  |
| 2 | 26 | 40 | 32 | 30 | 28 | 2 | |
| 24 |  | 42 |  | 46 |  | 54 | |
| 2 | 6 | 44 | 46 | 48 | 50 | 52 | |

Picnic Time Multiplication **Answers**

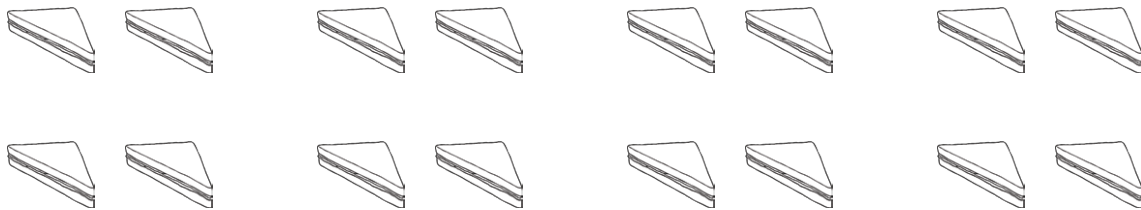
1. 5 children are on a picnic. Each child eats 2 apples. How many apples are eaten?



Answer:

10


2. 8 children are on a picnic. Each child eats 2 sandwiches. How many sandwiches are eaten?



Answer:

16

3. 3 children are on a picnic. Each child eats 5 biscuits. How many biscuits are eaten?



Answer:

15